



Sanskar City International School

SUMMER VACATION ASSIGNMENT (2024-25)

Class - IV

Creative Task

Week 1 - Tell about good habit and bad habit in general and make a creative video of it.

Week 2 - Prepare one healthy drink with the help of your mother and make a video of it .

Week 3 - Write any two tongue twister and practice 5-7 times and make a video of it.

Week 4 - Water the plants regularly and make a video of it.

Week 5 - Ask your grandfather/grandmother to tell you a story and what you learned from the story explain through video.

Week 6 – Make a short video on folding your clothes by your own.

Week 7 - Touch feet of your elders and make a video of it.

Week 8 - Use four magic words - Thank you, Sorry, please and excuse me and make a short video of it.

Note :- This is week wise assignment, and you have to start by telling general things like your name, class school, etc.



Sanskar City International School

SUMMER VACATION ASSIGNMENT (2024-25)

Class - IV

Subject : English

1. Read the passage carefully and answer the following questions –

There are four major domains of the Earth- Lithosphere, Atmosphere, Hydrosphere and Biosphere. The solid portion of the earth is called Lithosphere. The large land masses are known as continents. All continents lie in lithosphere.

There are seven continents. Asia is the largest continent and Australia is the smallest continent. Australia is called an island continent. The part of the earth which is covered with water is called Hydrosphere - The Pacific Ocean, The Atlantic Ocean, The Indian Ocean, The Southern Ocean and The Arctic Ocean. The Pacific Ocean is the largest ocean.

The earth is surrounded by a layer of gases called the atmosphere. There are five layers in the atmosphere. The Biosphere is the narrow zone of contact between the land, water and air.

1) How many domains of the earth are there?

Ans. _____

2) What is Lithosphere?

Ans. _____

3) Which continent is called island continent?

Ans. _____

4) What is Hydrosphere?

Ans. _____

5) Which ocean is the largest ocean of the world?

Ans. _____



Sanskar City International School

SUMMER VACATION ASSIGNMENT (2024-25)

Class - IV

2. Write a paragraph describing about your favorite cartoon character.

3. Fill in the blanks with proper nouns.

1. _____ came to meet me last Sunday.
2. We celebrate Holi in the month of _____.
3. _____ is the ninth month of the year.
4. My brother's name is _____.
5. _____ is the capital of India.

4. Fill in the blanks with the correct forms of the nouns given in brackets.

1. Radhika brushes her _____ (tooth/teeth) daily.
2. Please give me a _____ (glasses/glass) of water.
3. The gardener planted many _____ (tree/trees).
4. My sister gifted me a bouquet of _____ (flower/flowers).
5. I bought a pair of _____ (scissor/scissors) from the market.

5. Write whether these nouns are countable or uncountable.

1. salt - _____
2. dresses - _____
3. butter - _____
4. computer - _____



Sanskar City International School

SUMMER VACATION ASSIGNMENT (2024-25)

Class - IV

- 1) Read the English newspaper regularly and cut any five best pictures from it and paste it on A4 size sheet and give a catchy caption to each picture.
- 2) Make two lists for:
 - a) Things that are found in singular at your home.
 - b) Things that are found in plural at your home

Subject : Hindi



1. निम्नलिखित प्रश्नों के उत्तर दीजिए।

- (क) वर्ण किसे कहते हैं?
- (ख) स्वर और व्यंजन में क्या अंतर है?
- (ग) मात्रा किसे कहते हैं?

2. निम्नलिखित कथनों के सामने (✓) और (X) का चिह्न लगाइए।

- (क) भाषा की सबसे छोटी इकाई वर्ण है।
- (ख) स्वरों की संख्या 11 है।
- (ग) व्यंजनों को स्वरों की सहायता के बिना बोला जा सकता है।
- (घ) वर्णमाला के सारे वर्ण निश्चित क्रम में होते हैं।
- (ङ) सभी स्वरों की मात्राएँ होती हैं।


3. दिए गए शब्दों में अनुस्वार (ँ) अथवा अनुनासिक (ं) का प्रयोग कीजिए।




(क) मंदिर



(ख) पख



(ग) साप



(घ) सतरा



(ङ) दात



(च) कुआ

4. वर्णों को मिलाकर शब्द लिखिए।

उदाहरण- क् + ए + ल् + आ = केला

(क) र् + ऊ + प् + अ =

(ख) म् + ए + ल् + आ =



Sanskar City International School

SUMMER VACATION ASSIGNMENT (2024-25)

Class - IV

(ग) न् + औ + क् + अ + र् + ई =

(घ) क् + ऋ + ष् + ण् + अ =

(ङ) न् + आ + न् + ई =


5. दिए गए शब्दों में 'र' के विभिन्न रूपों का प्रयोग करके उचित शब्द बनाइए।



(क)थ



(ख) वषा



(ग) टेन

6. दिए गए शब्दों को 'क्ष', 'त्र', 'ज्ञ' अथवा 'श्र' से पूरे कीजिए।

(क) प...

(ख) क...ा

(ग) आ...म

(घ) ...मिक

(ङ) प...ी

(च) ने...

(छ) ...ानी

(ज) वि...ापन

7. संयुक्त व्यंजनों का प्रयोग करके दो-दो शब्द लिखिए।

(क) क्त -

(ख) प्य -

(ग) ट्ट -

(घ) क्क -

(ङ) स्व -



Sanskar City International School

SUMMER VACATION ASSIGNMENT (2024-25)

Class - IV

Subject : Mathematics

Place Value

Directions: following the example, write the expanded form of the following numbers.

| | |
|-------|--|
| 56481 | |
| 34893 | |
| 49591 | |
| 47592 | |
| 90090 | |
| 98992 | |
| 68309 | |
| 54382 | |
| 45213 | |



Sanskar City International School

SUMMER VACATION ASSIGNMENT (2024-25)

Class - IV

Worksheet on Successor and Predecessor

©math-only-math.com

©math-only-math.com

1. What is the successor of 67019?

2. What is the predecessor of 68299?

3. What is the successor of 457590?

©math-only-math.com

©math-only-math.com

4. What is the predecessor of 47810?

5. What is the successor of 251989?

6. What is the predecessor of 172000?

©math-only-math.com

7. What is the successor of 445499?

©math-only-math.com

8. What is the predecessor of 99000?

9. What is the successor of 16999?

10. What is the predecessor of 544300?

©math-only-math.com



Sanskar City International School

SUMMER VACATION ASSIGNMENT (2024-25)

Class - IV

Write 2 successors of the given numbers.

NUMBER

SUCCESSORS

| |
|-----|
| 548 |
|-----|

| |
|--|
| |
|--|

| |
|--|
| |
|--|

| |
|-----|
| 972 |
|-----|

| |
|--|
| |
|--|

| |
|--|
| |
|--|

| |
|-----|
| 456 |
|-----|

| |
|--|
| |
|--|

| |
|--|
| |
|--|

| |
|-------|
| 1,420 |
|-------|

| |
|--|
| |
|--|

| |
|--|
| |
|--|

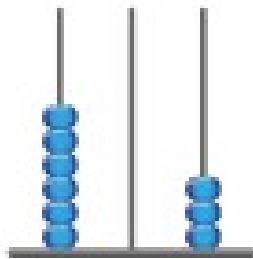


Sanskar City International School


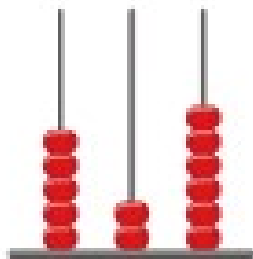
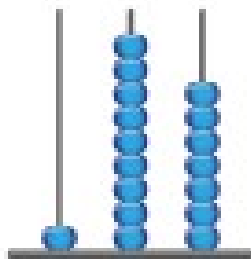


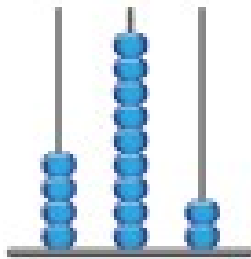

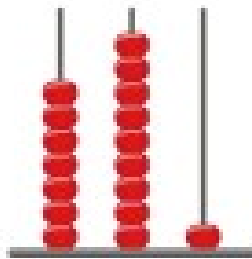
SUMMER VACATION ASSIGNMENT (2024-25)

Class - IV

PLACE VALUE - THREE DIGIT NUMBERS - No.1



603





Sanskar City International School

SUMMER VACATION ASSIGNMENT (2024-25)

Class - IV

What are solid shapes?

Any object that occupies space is called a solid shape or 3-dimensional object. The phrase 3-dimensional is justified by each object having 3 dimensions: length, width, and height. Some examples of solid shapes are:

1. Cone
2. Pyramid
3. Cube
4. Cuboid
5. Sphere
6. Hemisphere
7. Cylinder
8. Prism



TRIANGULAR PRISM



TETRAHEDROM



PENTAGONAL PRISM



CONE



CUBE



OCTAHEDRON



CYLINDER



SPHERE



HEXACONAL PRISM



Sanskar City International School

SUMMER VACATION ASSIGNMENT (2024-25)

Class - IV

EXAMPLES

Cones in Real Life

Here are some examples of cones in daily life:

- Ice cream cone
- Funnel
- Christmas tree

Question .1. Write 3-4 example of each to the above mention shapes which you see in your daily life ?



Sanskar City International School

SUMMER VACATION ASSIGNMENT (2024-25)

Class - IV

Subject : Social Science

- **Art work:- Draw and colour a picture of 'sunset in the mountain'.**
- **Collect the pictures of different styles of dressing cultural and places of following**
 - **Northern Plains:- Punjab, Haryana and Delhi**
 - **Name one place in the Himalayas you would like visit in holiday during the summer.**
 - **Why do you want to go there?**
- **Collect maximum information about the place and prepare the detail day wise programme of your tour.**
- **Make flags of all countries of world of the size 21 cm x 12cm of paper by pasting different coloured paper or by colouring it.**
- **Learn chapter-3, 4 and 5.**
- **Write the name of any fifteen state of India along with its capital.**



Sanskar City International School

SUMMER VACATION ASSIGNMENT (2024-25)

Class - IV

What Makes Water Dirty?

When harmful things such as garbage or waste is mixed up with water, water becomes dirty. This is called **water pollution**.

D. Look at the pictures given below. They show the condition of water in two places. Write down four things that you see in these pictures. In which of the places shown in these two pictures would you like to live? Why?



.....

.....

.....

.....

.....

.....

.....

.....

.....



.....

.....

.....

.....

.....

.....

.....

.....

.....



Sanskar City International School

SUMMER VACATION ASSIGNMENT (2024-25)

Class - IV

B. The pictures show different ways how air gets dirty. Identify and write the cause for air pollution under each picture.




.....
.....

Water Is Essential for Life

We drink water when we are thirsty. We also use it for our day-to-day activities.

C. Look at the given picture and tick (✓) the activities for which water is used.



- cooking bathing brushing teeth fixing a
leaking tap watering plants cleaning vehicles



Sanskar City International School

SUMMER VACATION ASSIGNMENT (2024-25)

Class - IV

Subject : Science

1. Tick (✓) the correct options:

- (a) The process which gives us food and oxygen:
(i) eating (ii) photosynthesis (iii) breathing (iv) none of these
- (b) The _____ carries water to all parts of the plant.
(i) Leaves (ii) Stem (iii) Roots (iv) Branches
- (c) The green colour of the leaves is because of presence of a green coloured pigment, called:
(i) stomata (ii) crotons (iii) chlorophyll (iv) all of these
- (d) The food substance prepared by photosynthesis is _____.
(i) glucose (ii) starch (iii) sugar (iv) none of these
- (e) Extra food is converted into starch and can be stored in:
(i) fruits (ii) stem (iii) roots (iv) all of these

2. State whether the given statements are true (T) or false (F):

- (a) Stem makes food for the plant.
- (b) Roots not only affix the plant firmly to the ground but also soak up water and minerals for the plants.
- (c) Sunlight provides energy for preparing food in the leaves.
- (d) Potato is a food-storing root.
- (e) Tiny openings on the surface of a leaf are called chlorophyll.

3. Fill up the blanks:

- (a) Air contains many gases, but the most essential gas for living things is _____.
- (b) The raw materials needed for photosynthesis are _____,
_____, _____ and _____.
- (c) Stem bears branches on which _____ and _____ grow.
- (d) _____ helps in trapping sunlight for _____.
- (e) 'Photo' means _____ and 'synthesis' means _____.



Sanskar City International School

SUMMER VACATION ASSIGNMENT (2024-25)

Class - IV

4. Match the following:

- | | |
|-------------|----------------------------------|
| (a) Root | Photosynthesis |
| (b) Stem | Exchange of gases |
| (c) Leaf | Bears branches |
| (d) Stomata | Food in plants is stored as this |
| (e) Starch | Absorbs water |

5. Mention the main functions performed by:

- (a) Roots

- (b) Stem

- (c) Leaves

6. Answer the following questions:

- (a) Define photosynthesis.

- (b) How do plants take up water from the soil?

- (c) Explain the structure of leaves with diagram.





Sanskar City International School

SUMMER VACATION ASSIGNMENT (2024-25)

Class - IV

(d) Why do bigger plants have more number of leaves?

(e) How is food prepared by leaves transported and utilised by the plant?

7. HOTS questions (Higher Order Thinking Skills):

(a) Give a distinct feature of plants that makes them different from other living beings.

(b) Are flowers on plants just for beauty or do they have any special function?

ACTIVITIES

8. Perform the iodine test on the following food items and write the result:

| Food item | Presence of starch |
|-----------------|--------------------|
| Bread | Yes/No ✓ |
| Sugar | Yes/No ✓ |
| Rice grains | Yes/No ✓ |
| Boiled rice | Yes/No ✓ |
| Slice of potato | Yes/No ✓ |
| Flour | Yes/No ✓ |
| Dough | Yes/No |

9. Make a kitchen garden

Plant some vegetable seeds, like okra, green chilli, etc., in your garden or pots. Water them regularly and add manure to them. Watch your vegetables grow.



Sanskar City International School

SUMMER VACATION ASSIGNMENT (2024-25)

Class - IV

Subject : Music

Make video of one Bhajan and two school prayer.

Prayers are :

- 1) Hey sharde maa
- 2) Itni shakti hume de naa data
- 3) Aye malik tere bande hum

Subject : Computer

Using Internet (Google search engine) or from newspaper, Magazines - take print out/cut the various 'Early computing devices and inventor scientist' pictures (8-12 in sticker size),

Paste them in your computer Notebook on plain page and label it.






Sanskar City International School

SUMMER VACATION ASSIGNMENT (2024-25)

Class - IV

Subject : Drawing

Easy Drawing Ideas. "Elephant" Draw it.





Sanskar City International School

SUMMER VACATION ASSIGNMENT (2024-25)

Class - IV

Colour it.

